

円周をもとめる

目標時間	10分
------	-----

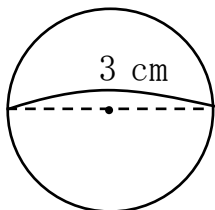
NO. 4

名前	
----	--

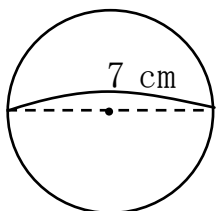
/10

◆ 次の円の円周の長さを求めなさい

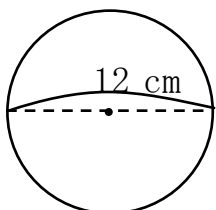
①



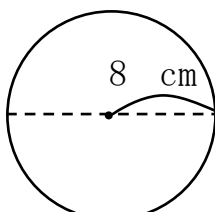
②



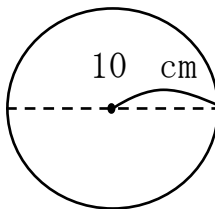
③



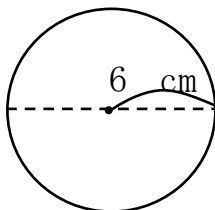
④



⑤



⑥



答え

$$\textcircled{1} \quad \text{式} \quad 3 \times 3.14 = 9.42$$

9.42 cm

$$\textcircled{2} \quad \text{式} \quad 7 \times 3.14 = 21.98$$

21.98 cm

$$\textcircled{3} \quad \text{式} \quad 12 \times 3.14 = 37.68$$

37.68 cm

$$\textcircled{4} \quad \text{式} \quad 8 \times 2 \times 3.14 = 50.24$$

50.24 cm

$$\textcircled{5} \quad \text{式} \quad 10 \times 2 \times 3.14 = 62.8$$

62.8 cm

$$\textcircled{6} \quad \text{式} \quad 6 \times 2 \times 3.14 = 37.68$$

37.68 cm
